

# CONDUCTION, CONVECTION & RADIATION


**Directions** - Look at each picture. Decide what type of heat transfer is taking place. (There may be more than one.) Fill in the bubble to show your answer.




- Conduction
- Convection
- Radiation




- Conduction
- Convection
- Radiation




- Conduction
- Convection
- Radiation



- Conduction
- Convection
- Radiation



- Conduction
- Convection
- Radiation



- Conduction
- Convection
- Radiation